



Hi! I am planting crocus bulbs today.

I have a window box which measures 25 cm x 15 cm.  
Each square on the grid represents 1 cm.

Use the instructions on the bulb packet and work out what is the maximum number of bulbs I can fit in this window box. Mark on the lines on the grid where I need to plant the bulbs. Remember I can't plant any row less than 1 cm away from the edge of the window box.

(Planting rows can go across or down.)



## CROCUS BULBS



### Planting Instructions

Plant in rows 7 cm apart.

Plant bulbs 8 cm apart in each row.



The maximum number of bulbs I can plant is:

1 square on the grid = 1 cm  
(not to scale)



Hi! I am planting daffodil bulbs today.

I have a flower bed which measures 200 cm x 100 cm.  
Each square on the grid represents 10 cm.

Use the instructions on the bulb packet and work out what is the maximum number of bulbs I can fit in this flower bed. Mark on the lines on the grid where I need to plant the bulbs. Remember I can't plant any row less than 10 cm away from the edge of the flower bed.

(Planting rows can go across or down.)



## DAFFODIL BULBS



### Planting Instructions

Plant in rows 30 cm apart.

Plant bulbs 20 cm apart in each row.



1 square on the grid = 10 cm  
(not to scale)

The maximum number of bulbs I can plant is:



Hi! I am planting tulip bulbs today.

I have a flower bed which measures 200 cm x 100 cm.  
Each square on the grid represents 10 cm.

Use the instructions on the bulb packet and work out what is the maximum number of bulbs I can fit in this flower bed. Mark on the lines on the grid where I need to plant the bulbs. Remember I can't plant any row less than 10 cm away from the edge of the flower bed.

(Planting rows can go across or down.)



## TULIP BULBS



### Planting Instructions

Plant in rows 20 cm apart.

Plant bulbs 10 cm apart in each row.

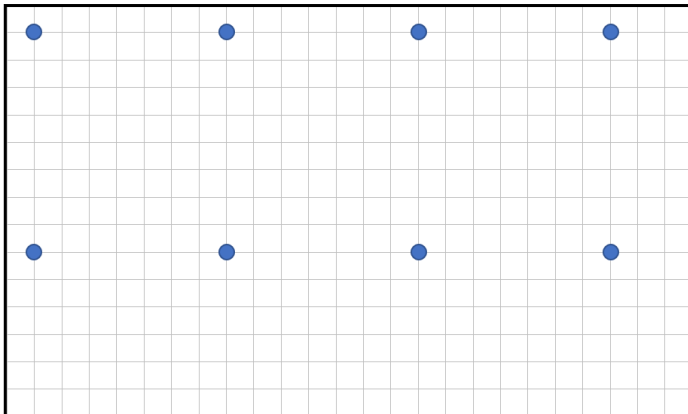


1 square on the grid = 10 cm  
(not to scale)

The maximum number of bulbs I can plant is:

Answers:

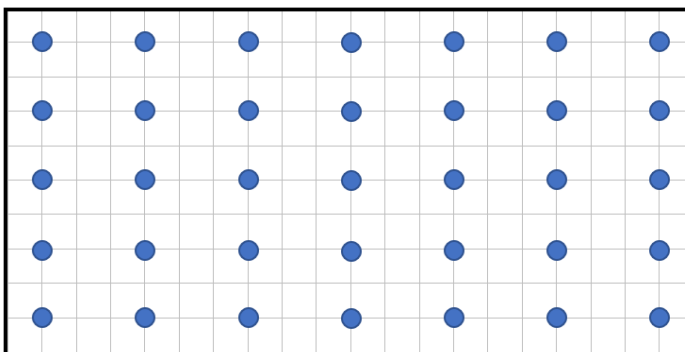
Page 1



The grid should be marked out in a similar way to this, making sure that there is 8 cm between each row and 7 cm between the bulbs in each row.

The maximum number of crocus bulbs that can be planted is 8.


Page 2



The grid should be marked out in a similar way to this, making sure that there is 30 cm between each row and 20 cm between the bulbs in each row.

The maximum number of daffodil bulbs that can be planted is 35.

Page 3



The grid should be marked out in a similar way to this, making sure that there is 20 cm between each row and 10 cm between the bulbs in each row.

The maximum number of tulip bulbs that can be planted is 95.